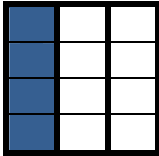
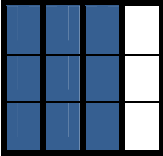

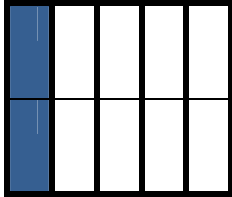
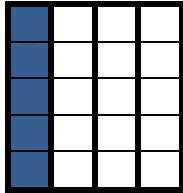
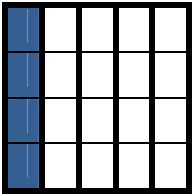
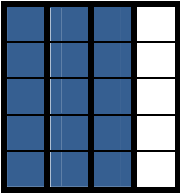
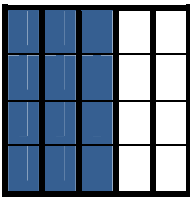
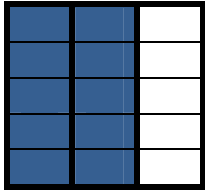

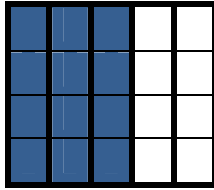
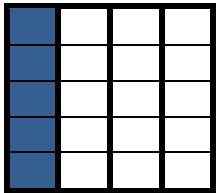
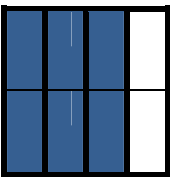
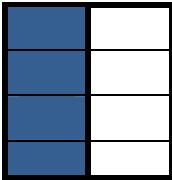
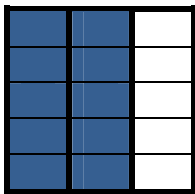
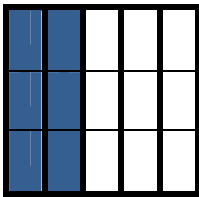
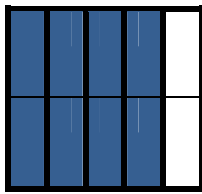



### Adding and Subtracting Fraction Sort

<p>1</p> <div style="display: flex; align-items: center; justify-content: center; gap: 20px;">  <span>+</span>  </div>	<p>2</p> <div style="display: flex; align-items: center; justify-content: center; gap: 20px;">  <span>+</span>  </div>	<p>3</p> <div style="display: flex; align-items: center; justify-content: center; gap: 20px;">  <span>+</span>  </div>
<p>4</p> <div style="display: flex; align-items: center; justify-content: center; gap: 20px;">  <span>+</span>  </div>	<p>5</p> <div style="display: flex; align-items: center; justify-content: center; gap: 20px;">  <span>+</span>  </div>	<p>6</p> <div style="display: flex; align-items: center; justify-content: center; gap: 20px;">  <span>-</span>  </div>
<p>7</p> <div style="display: flex; align-items: center; justify-content: center; gap: 20px;">  <span>-</span>  </div>	<p>8</p> <div style="display: flex; align-items: center; justify-content: center; gap: 20px;">  <span>-</span>  </div>	<p>9</p> <div style="display: flex; align-items: center; justify-content: center; gap: 20px;">  <span>-</span>  </div>

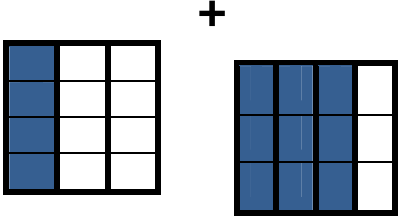
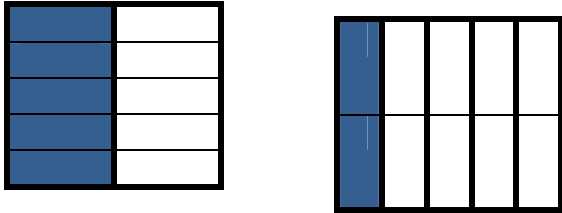
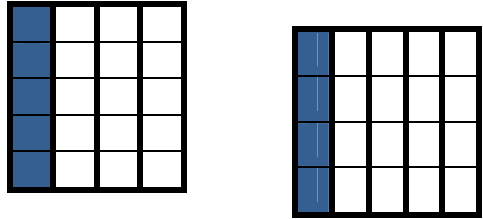
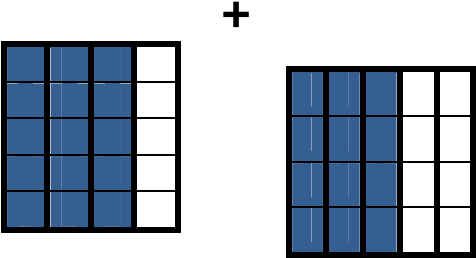
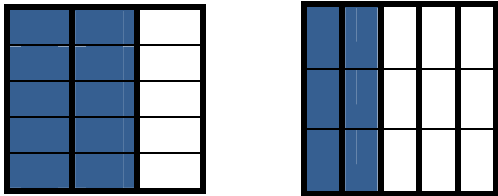
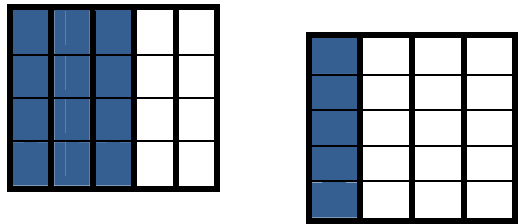

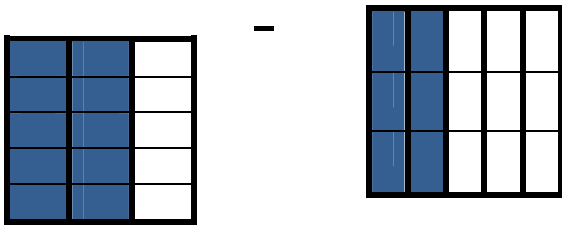
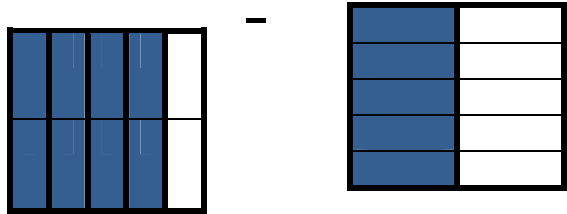
Adding and Subtracting Fraction Sort

A $\frac{4}{5} - \frac{1}{2}$	B $\frac{2}{3} - \frac{2}{5}$	C $\frac{3}{4} - \frac{1}{2}$
D $\frac{3}{5} - \frac{1}{4}$	E $\frac{3}{4} + \frac{1}{3}$	F $\frac{1}{2} + \frac{1}{5}$
G $\frac{1}{4} + \frac{1}{5}$	H $\frac{2}{3} + \frac{2}{5}$	I $\frac{3}{4} + \frac{3}{5}$

Adding and Subtracting Fraction Sort

a. $\frac{27}{20}$ or $1\frac{7}{20}$	b. $\frac{16}{15}$ or $1\frac{1}{15}$	c. $\frac{9}{20}$
d. $\frac{7}{10}$	e. $\frac{13}{12}$ or $1\frac{1}{12}$	f. $\frac{3}{10}$
g. $\frac{4}{15}$	h. $\frac{2}{8}$ or $\frac{1}{4}$	i. $\frac{7}{20}$

### Answer Key (Adding and Subtracting Fraction Sort)

<p>1</p>  <p><math>E = \frac{3}{4} + \frac{1}{3}</math>      <math>e. = \frac{13}{12}</math> or <math>1 \frac{1}{12}</math></p>	<p>2</p>  <p><math>F = \frac{1}{2} + \frac{1}{5}</math>      <math>d. = \frac{7}{10}</math></p>	<p>3</p>  <p><math>G = \frac{1}{4} + \frac{1}{5}</math>      <math>c. = \frac{9}{20}</math></p>
<p>4</p>  <p><math>I = \frac{3}{4} + \frac{3}{5}</math>      <math>a. = \frac{27}{20}</math> or <math>1 \frac{7}{20}</math></p>	<p>5</p>  <p><math>H = \frac{2}{3} + \frac{2}{5}</math>      <math>b. = \frac{16}{15}</math> or <math>1 \frac{1}{15}</math></p>	<p>6</p>  <p><math>D = \frac{3}{5} - \frac{1}{4}</math>      <math>i. = \frac{7}{20}</math></p>
<p>7</p>  <p><math>C = \frac{3}{4} - \frac{1}{2}</math>      <math>h. = \frac{2}{8}</math> or <math>\frac{1}{4}</math></p>	<p>8</p>  <p><math>B = \frac{2}{3} - \frac{2}{5}</math>      <math>g. = \frac{4}{15}</math></p>	<p>9</p>  <p><math>A = \frac{4}{5} - \frac{1}{2}</math>      <math>f. = \frac{3}{10}</math></p>

**Answer Key**

<b>Problem</b>	<b>Visual</b>	<b>Solution</b>
$A = \frac{4}{5} - \frac{1}{2}$	9	f.
$B = \frac{2}{3} - \frac{2}{5}$	8	g.
$C = \frac{3}{4} - \frac{1}{2}$	7	h.
$D = \frac{3}{5} - \frac{1}{4}$	6	i.
$E = \frac{3}{4} + \frac{1}{3}$	1	e.
$F = \frac{1}{2} + \frac{1}{5}$	2	d.
$G = \frac{1}{4} + \frac{1}{5}$	3	c.
$H = \frac{2}{3} + \frac{2}{5}$	5	b.
$I = \frac{3}{4} + \frac{3}{5}$	4	a.

## Student Recording Sheet

<b>Problem</b>	<b>Visual</b>	<b>Solution</b>
$A = \frac{4}{5} - \frac{1}{2}$		
$B = \frac{2}{3} - \frac{2}{5}$		
$C = \frac{3}{4} - \frac{1}{2}$		
$D = \frac{3}{5} - \frac{1}{4}$		
$E = \frac{3}{4} + \frac{1}{3}$		
$F = \frac{1}{2} + \frac{1}{5}$		
$G = \frac{1}{4} + \frac{1}{5}$		
$H = \frac{2}{3} + \frac{2}{5}$		
$I = \frac{3}{4} + \frac{3}{5}$		