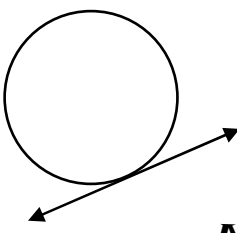
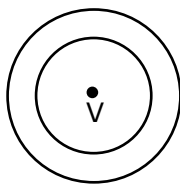
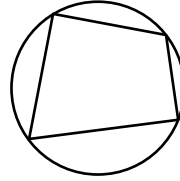
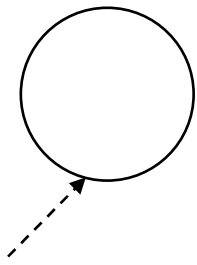

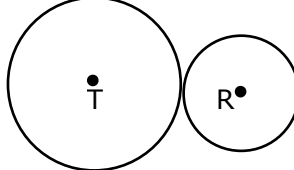
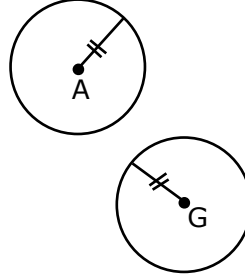
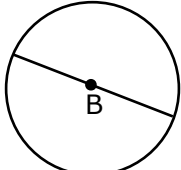
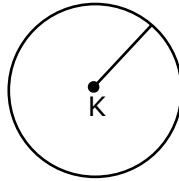
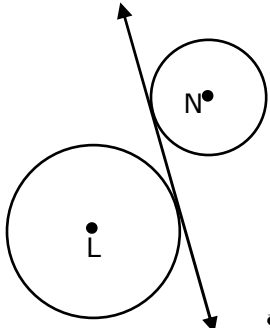
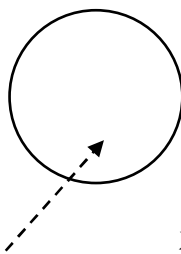
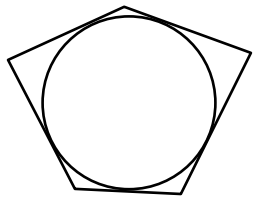
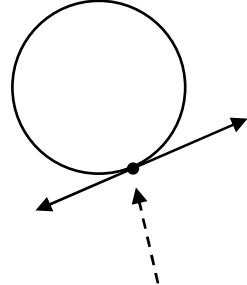
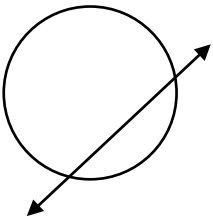
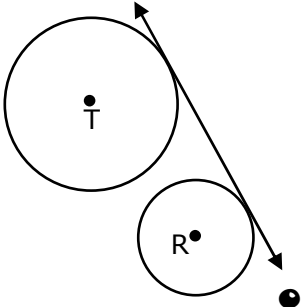

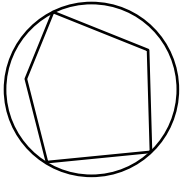
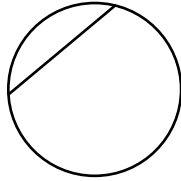
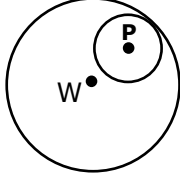


CIRCLES—Match the diagrams to the words/terms that describe them.

RADIUS 1	DIAMETER 2	CHORD 3	TANGENT 4
POINT OF TANGENCY 5	SECANT 6	INTERIOR 7	EXTERIOR 8
ACTUAL CIRCLE 9	A CIRCLE WITH CENTER C 10	CONGRUENT CIRCLES 11	CONCENTRIC CIRCLES 12
INTERNALLY TANGENT CIRCLES 13	EXTERNALLY TANGENT CIRCLES 14	COMMON EXTERNAL TANGENT 15	COMMON INTERNAL TANGENT 16
INSCRIBED POLYGON 17	CIRCUMSCRIBED POLYGON 18	NOT AN INSCRIBED POLYGON 19	NOT A CIRCUMSCRIBED POLYGON 20

CIRCLES—Match the diagrams to the words/terms that describe them.

 <p>A</p>	 <p>B</p>	 <p>C</p>	 <p>D</p>
 <p>E</p>	 <p>F</p>	 <p>G</p>	 <p>H</p>
 <p>I</p>	 <p>J</p>	 <p>K</p>	 <p>L</p>
 <p>M</p>	 <p>N</p>	 <p>O</p>	<p>" ⊙ C "</p> <p>P</p>
 <p>Q</p>	 <p>R</p>	 <p>S</p>	 <p>T</p>